



Bighelp
for education

Bighelp For Education

Math Bee Contest - 2018

A Catalyst For Better Education In India

Level-1 (grade 1)

Score Card

Name of the student : _____

Parent's Cell Phone : _____

Student Grade : _____

For the use of Math bee coordinator ONLY:

Section A&B Score : _____

Section C Score : _____

Total Score : _____

Section-A:- (15 questions –Multiple Choice)

Circle the correct answers for the following questions 1 - 15:-

1)What is the sum of7, 6, and 10?

A) 3

B) 21

C) 16

D) 23

2) Find the total value of thecoins below?




A) 57 cents

B) 62 cents

C) 22 cents

D) 50 cents

3)What is the name of the shape below?



A) Rectangle

B) Square

C) Trapezoid

D) Rhombus

4) Nick and four kids are at a birthday party. Five more kids joined them. How many kids are there now?

A) 9

B) 11

C) 6

D) 10

5) Eight kids were playing football. Some kids joined them, now there are 20 kids playing football. How many kids joined the game?

- A) 8 B) 12 C) 10 D) 14

6) _____ is 20 less than 86.

- A) 76 B) 96 C) 106 D) 66

7) What is the time shown in the clock below?



- A) 12:30 B) 1:35 C) 12:35 D) 7:03

8) What are the missing numbers needed to complete the pattern?

20, 16, 12, _____, _____

- A) 10, 8 B) 8, 4 C) 9, 5 D) 6, 2

9)If

$$\heartsuit + 3 = 6 + 5$$

The value of \heartsuit is _____

A) 5

B) 7

C) 8

D) 6

10)What is the name of the shape below?



A) Pentagon

B) Triangle

C) Octagon

D) Square

11)Each toy tri-cycle has 3 wheels. How many wheels do four toy tri-cycles have?

A)8

B)12

C)4

D)7

12)Rani has 17 stamps. Ali has 8 stamps fewer than Rani.
How many stamps does Ali have?

A) 25

B) 17

C) 8

D) 9

13) Which even number comes after 16 and before 20

A) 17

B) 19

C) 21

D) 18

14) How many dimes are equal to a dollar?



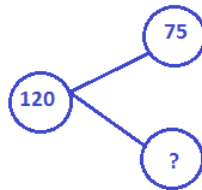
A) 20

B) 4

C) 10

D) 100

15) What is the missing number from the number bond below?

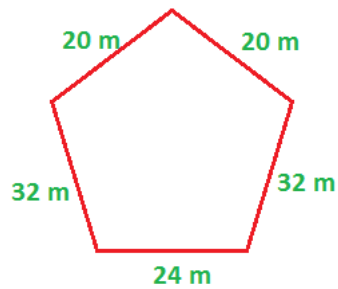


A) 45

B) 50

C) 195

D) 100

Section -B: (10 Questions - Fill in the blanks)**Fill in the blank with the correct answer 16- 25****16)** What is the sum of all sides of the Pentagon shape below?

Answer: _____ m

17) Alisa bakes 14 muffins, her children eat 5 muffins in total.
How many muffins are left?

Answer: _____ muffins.

18) Add the two numbers below

$$\begin{array}{r} 562 \\ + 128 \\ \hline \hline \end{array}$$

Answer: _____

19) Find the sum of the following amounts of money below

$$\mathbf{\$200 + \$300 + \$400}$$

Answer: \$ _____.

20) Lee saved \$3 a day. How much did he save in a week?

Answer: \$ _____

21) Srija has \$45. She wants to buy 2 dresses. One costs \$20 and the other costs \$38. How much more money does she need?

Answer: \$ _____

22) Rani split 30 marbles equally into 3 jars. How many marbles are in each jar?


Answer: _____ marbles.

23)Pranay finished playing football at 10:45 AM. If he played football for 2 hours, what time did he start playing football?



Answer: _____ AM

24)Eight monkeys are in a zoo. Each monkey has 4 bananas. How many bananas are there in all?



Answer: _____ Bananas

25) Geeta bought 17 cookies. She gives 3 cookies to Sam and 7 cookies to Ryan. How many cookies does she have left?

Answer: _____ Cookies

Section-C :- (5 questions – Challenging)

Solve the problem and write the answer in the blank provided:

- 26)** Ram is 14 years old.
His sister Nandana is 4 years older than him.
His brother Akhil 6 years younger than Nandana.
How old is Akhil?

Answer: _____ years old

- 27)** Jamie bought 18 pastries. She put 2 pastries in each box. How many boxes did she use?

Answer: _____ boxes

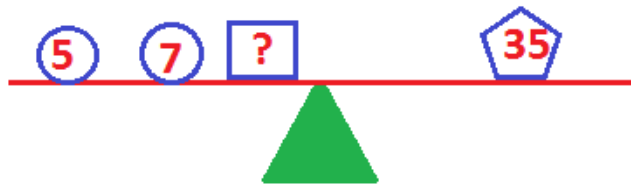
- 28)** 10 hours 10 minutes is _____ Minutes?

Answer: _____ Minutes

29) There are 6 bottles in each row. How many bottles are there in 9 rows in total?

Answer: _____ bottles

30) Find the value of the square in the following balance problem?



Answer: _____

Level 1 Answer Key:

Number	Level 1
1	D
2	B
3	C
4	D
5	B
6	D
7	C
8	B
9	C
10	C
11	B
12	D
13	D
14	C
15	A
16	128
17	9
18	690
19	900
20	21
21	13
22	10
23	8:45am
24	32
25	7
26	12
27	9
28	610
29	54
30	23