



Bighelp
for education

Bighelp For Education

Math Bee Contest - 2011

A Catalyst For Better Education In India

Level-1

Score Card

Name of the student: _____

Level : 1

For the use of math bee coordinator ONLY:

Section A&B Score : _____

Section C Score : _____

Total score : _____



Section-A :- (15 questions – Multiple Choice)

Circle the correct answers for the following questions 1 - 15:-

1. The number between 15 and 19 is

- a) 18 b) 15 c) 20 d) 13

2. Which of the following makes a 20?

- a) 16 and 3 b) 15 and 4 c) 17 and 3 d) 2 and 19

3. If $8 + \bullet = 13$, what is the value of \bullet ?

- a) 2 b) 3 c) 5 d) 4

4. Ann bought 18 eggs. 6 eggs broke. How many eggs remained?

- a) 12 b) 17 c) 13 d) 15

5. Who is 4th from the right?



Amanda



Jeffrey



Lisa



Angela



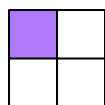
Joe



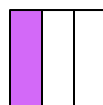
Florence

- a) Angela b) Jeffrey c) Joe d) Lisa

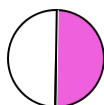
6. Which shape shows the fraction $1/3$?




First



Second



Third



Fourth

- a) First b) Second c) Third d) Fourth



7. $11 + 5 + 2 = ?$

- a) 19 b) 15 c) 18 d) 16

8. How much is 10 pennies equal to?

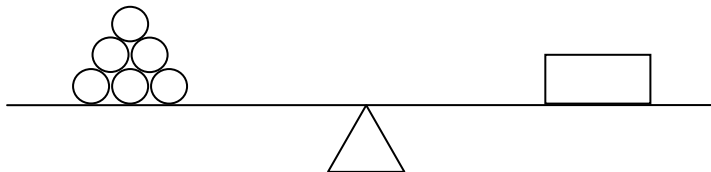
- a) 1 Dime b) 3 Nickels c) 1 Quarter d) 2 Dimes

9. On what day of the week is September 20?

September						
Sun	Mon	Tue	Wed	Thu	Fri	Sat
1	2	3	4	5	6	7
8	9	10	11	12	13	14
15	16	17	18	19	20	21
22	23	24	25	26	27	28
29	30					

- a) Monday b) Sunday c) Friday d) Saturday

10. The box weighs about –



- a) 6 circles b) 5 circles c) 7 circles d) 3 circles




11. How many more apples are there than pears?



- a) 7 b) 5 c) 6 d) 8

12. Look at the picture graph below and tell how many children like Tomato.




- a) 6 b) 2 c) 5 d) 3

13. Which is the related subtraction fact for $9 - 7 = 2$?

- a) $8 - 2 = 6$ b) $10 - 2 = 8$ c) $9 - 0 = 9$ d) $9 - 2 = 7$

14. What comes after 14?



- a) 16 b) 13 c) 18 d) 15



15. Circle the chairs into groups of 3. How many groups of chairs are there?




- a) 4
- b) 3
- c) 5
- d) 6

Section -B: (10 Questions - Fill in the blanks)

Fill in the blank with the correct answer 16- 25

16) The time on the clock



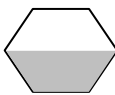
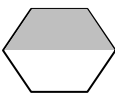


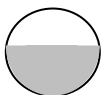
is _____.

17) 9 tens and 4 ones = _____.



18) \$20 = _____ five-dollar bills.

19) Write true or false. 4×5 is not same as $4 + 5$ _____.

20) _____ is 3 more than 9.

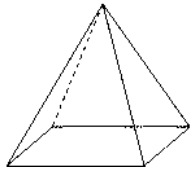
21)      _____

22) Write 198 in words _____.

23)   Total money = _____ cents.



24) Write true or false. 17 is even number _____.

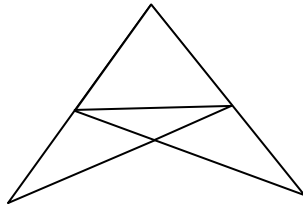


25) The number of faces this figure has = _____.

Section-C :- (5 questions – Challenging)

Solve the problem and write the answer in the blank provided:

26) How many triangles are there in the picture?



ANSWER: _____

27) Mike bought 57 marbles. On his way home, he lost 14 marbles. Later, he gave 19 marbles to his cousin. How many marbles did Mike have left?

ANSWER: _____



Bighelp
for education

A Catalyst For Better Education In India

Bighelp For Education

Math Bee Contest - 2011

Level : 1

28) Melissa has a 5-dollar bill, ten dimes and four quarters. After buying a pen for \$3 and a big lollipop for \$2 how much does she have left?

ANSWER: _____

29) There are 18 children in line. Mark and Tony join the line. Then another group of 7 children joins the line. How many children are there in the line together?

ANSWER: _____

30) Each \square stands for 1 unit. The weight of a papaya is about $8\square$. A watermelon is about $5\square$ heavier than a papaya. How much does a watermelon weigh?

ANSWER: _____